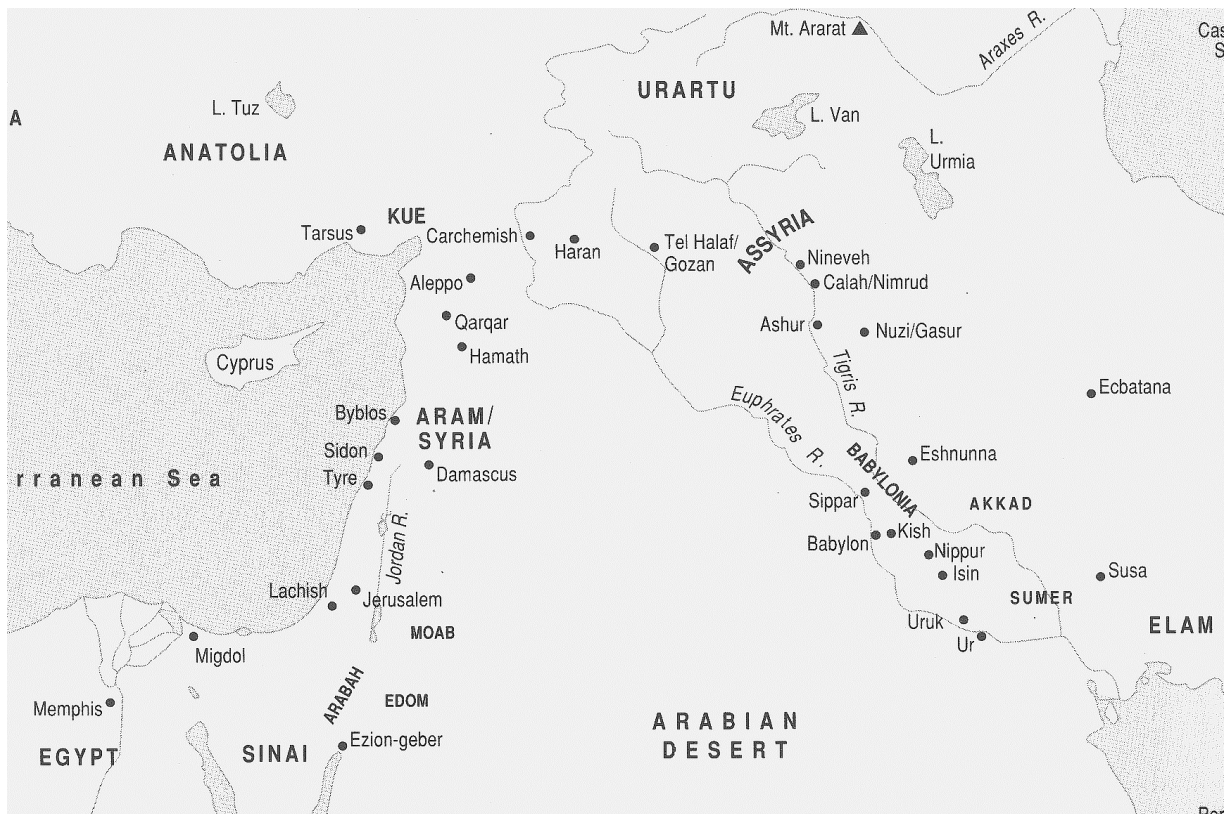


- 1.1.- Locate on a map the main regions of the Ancient Near East (ANE): Egypt, Cyprus, Hatti, Mesopotamia, Assyria, Babylon, Elam, Syria, Phoenicia, Palestine, Sinai. Locate on a map the following cities: Tyre, Sidon, Ugarit (Ras Shamra), Damascus, Haran, Nineveh, Asshur, Babylon.



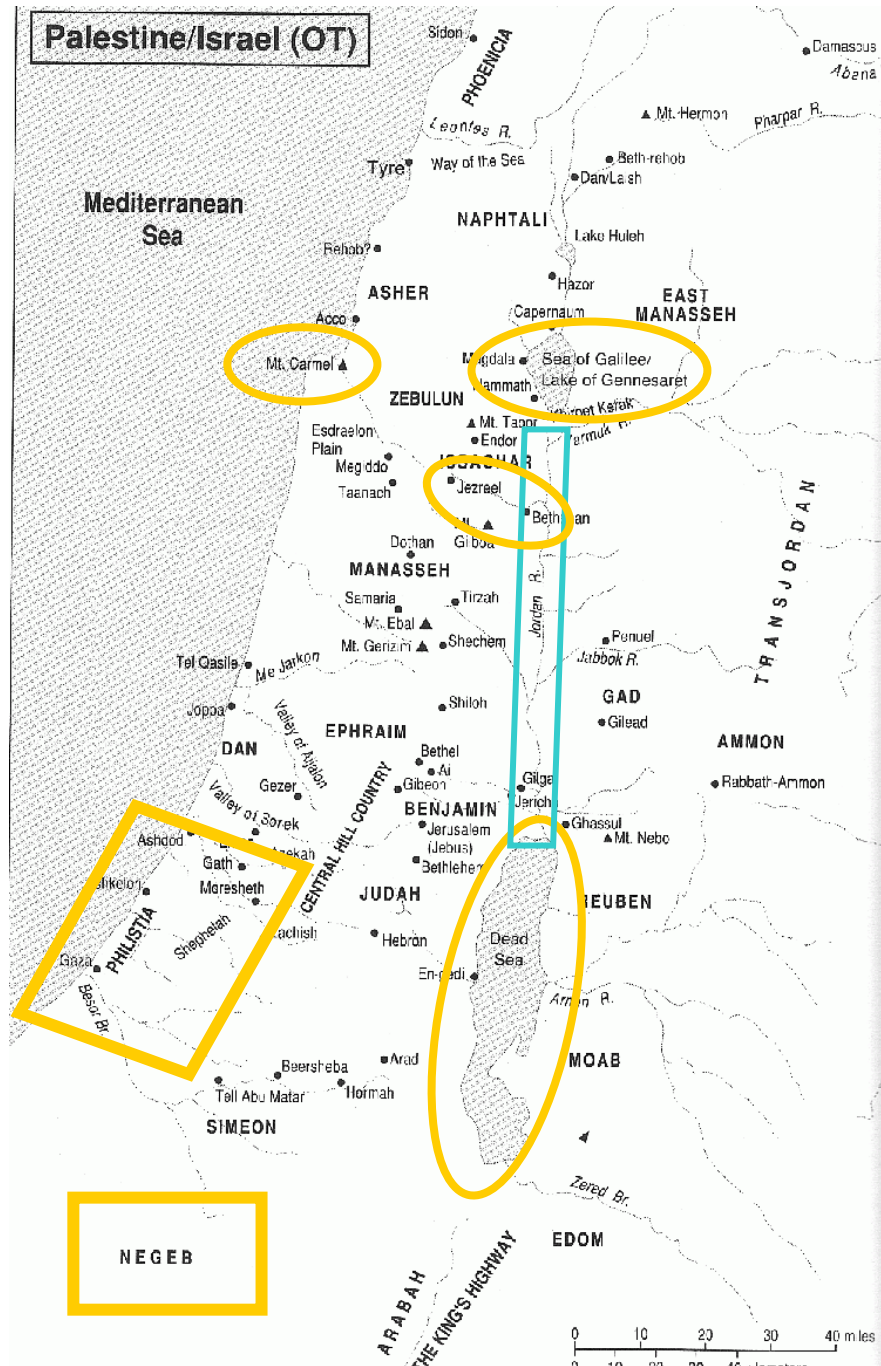
- Cyprus is the Island surrounded by the sweeping blue arrow.
- Mesopotamia is the area later divided as Assyria and Babylonia (cf. Map 1.2.)
- Sumer would appear where the Euphrates and Tigris Rivers join. (cf. Map 1.2.)
- Elam is to the east of Sumer (cf. Map 1.2.)
- Aram / Syria was situated above Palestine (cf. Map 1.2.)
- Phoenicia the strip of land along the sea including the cities of Byblos, Sidon and Tyre.
- Haran is roughly situated where there's a bright red dot between 'Assyria' & Carchemish.

- 1.2.- Locate and give a brief description of the following peoples: Sumerians, Assyrians, Hittites, Egyptians, Phoenicians, Moabites, Ammonites, Edomites, the Sea People, The Philistines. Give some information from the Bible on these people.



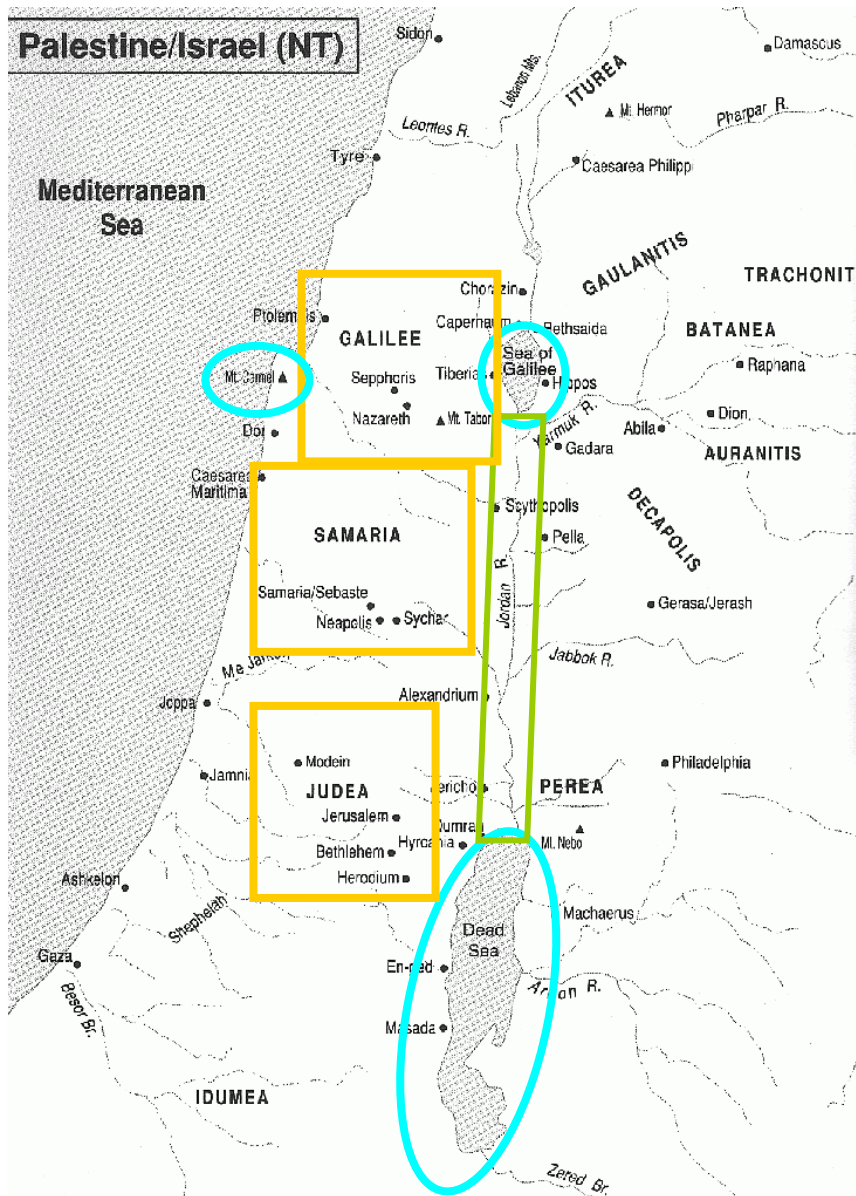
- The Hittites land of Hatti is here known as Anatolia.
- Phoenicia the strip of land along the sea including the cities of Byblos, Sidon and Tyre.
- Ammon was situated north and east of Moab. (cf. Map 1.3.)
- Sumer would appear where the Euphrates and Tigris Rivers join. (cf. Map 1.2.)
- The sweeping blue arrow in Map 1.1. represents the movement and settlement patterns of the Sea people. The sweeping brown line represents the movement of their armies.
- For the location of the Philistines (a Sea People) cf. Map 1.3a.

- 1.3a. Locate on a map the main regions of the Promised Land: Galilee, Samaria, Judea, the Plain of Jezreel, Mount Carmel, Lake of Gennesareth, Jordan Valley, Dead Sea, Negeb (Arabia), the land of the Philistines. Give some information from the Bible concerning these cities.



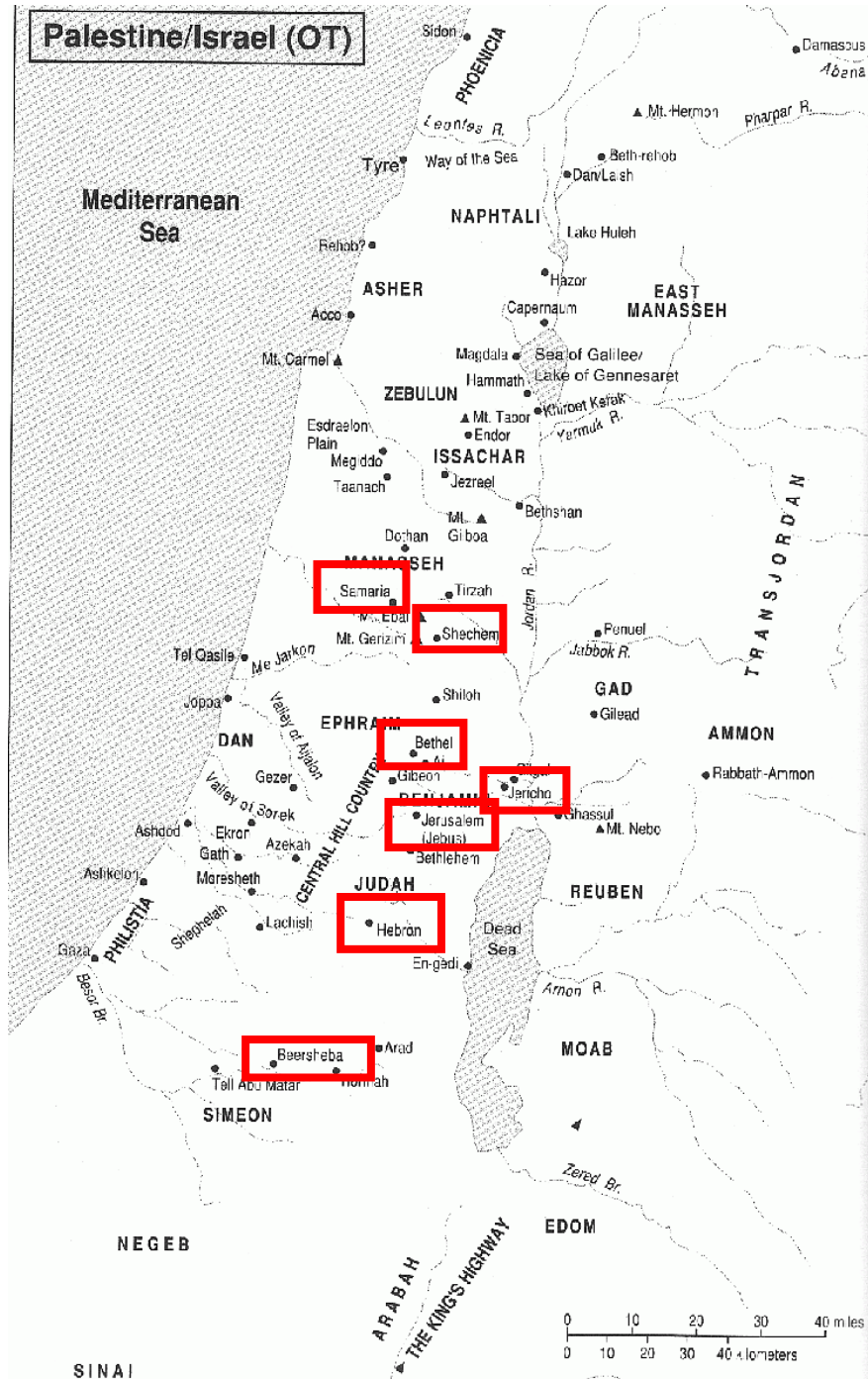
- For non-bolded entries cf Map 1.3b.

- 1.3b. **Locate on a map the main regions of the Promised Land: Galilee, Samaria, Judea, the plain of Yazreel, Mount Carmel, Lake of Gennesereth, Jordan Valley, Dead Sea, Negeb (Arabia), the land of the Philistines. Give some information from the Bible concerning these cities.**





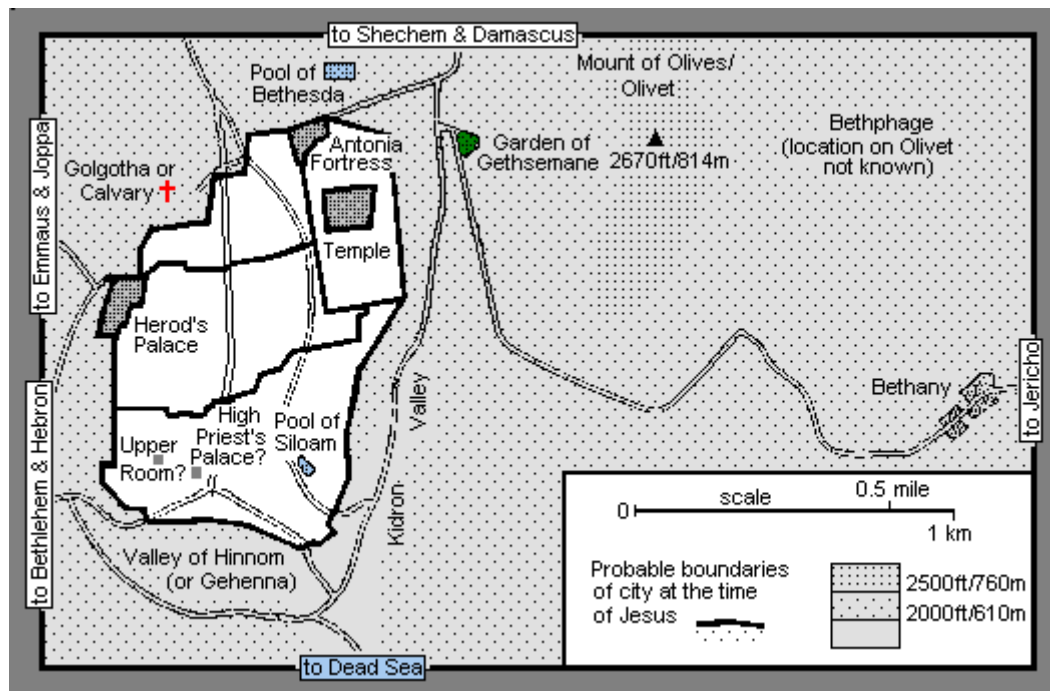
- 1.4.- Locate on a map the main cities mentioned in the Old Testament: Jerusalem, Samaria, Shechem, Bethel, Jericho, Hebron, Beersheba. Give some information from the Bible concerning these cities.



- 1.5a.- Locate on a map the main places mentioned in the New Testament: Jerusalem, Bethania, Nazareth, Bethlehem, Capharnaum, Caesarea Maritima and Caesarea Philippi. Locate the following on a map of Jerusalem in New Testament times: the Temple, Mount of Olives, Calvary. Give some information found in the Bible concerning these places.



- 1.5b.-** Locate on a map the main places mentioned in the New Testament: Jerusalem, Bethania, Nazareth, Bethlehem, Capharnaum, Caesarea Maritima and Caesarea Philippi. **Locate the following on a map of Jerusalem in New Testament times: the Temple, Mount of Olives, Calvary. Give some information found in the Bible concerning these places.**



1.6.- The voyages of St Paul: locate on a map the main places connected with Saint Paul: Tarsus, Antioch, Galatia, Ephesus, Athens, Philippi, Thessalonica, Corinth, Malta, Rome.

